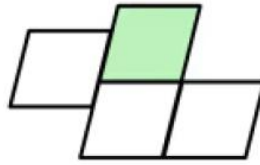
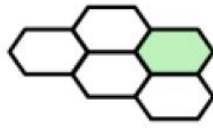



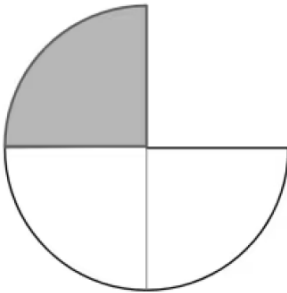
Which of these pictures show  $\frac{1}{4}$ ? Tick 2 correct answers







What is the name of this fraction? Tick 1 correct answer



- one-half  
 one-third  
 one-quarter

Tick the correct fraction notation that shows one-fifth Tick 1 correct answer

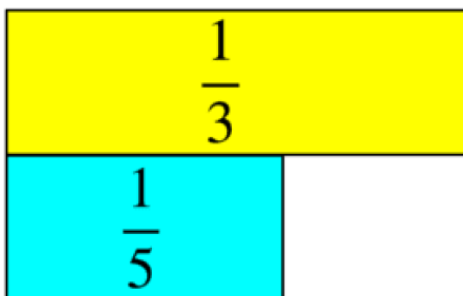
- $\frac{2}{3}$   
  $\frac{5}{0}$   
  $\frac{1}{5}$   
  $\frac{5}{1}$

Match the fraction name to the fraction notation. Write the correct letter in each box

a	$\frac{1}{2}$
b	$\frac{1}{3}$
c	$\frac{1}{5}$
d	$\frac{1}{12}$

	one-fifth
	one-half
	one-third
	one-twelfth

Fill in the correct word from the choices below to complete this sentence: one-third is \_\_\_\_\_ than one-fifth. Tick 1 correct answer



- greater  
 smaller