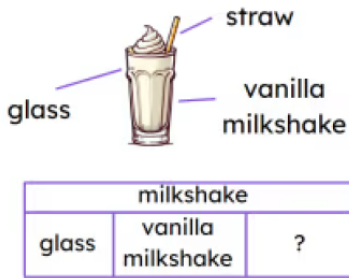



Unit fractions as part of a whole - understanding the whole and the parts

1 Fill in the missing part in the bar model below. The whole is a milkshake. Tick 1 correct answer



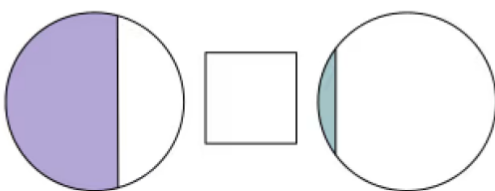
- milkshake
- glass
- straw
- vanilla milkshake

2 Which inequality symbol goes in here to compare how much water is in each bottle? Tick 1 correct answer



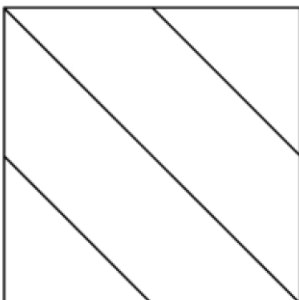
- >
- <
- =

3 Which inequality symbol goes in here to compare how much of the circle is shaded? Tick 1 correct answer



- >
- <
- =

4 This square has been split into four parts. Tick 1 correct answer



- It is made up of 4 equal parts.
- It is made up of 4 unequal parts.