



Identify properties of quadrilaterals

1 How many vertices does a quadrilateral have? Fill in the blank

2 Which of these shapes are quadrilaterals? Tick 2 correct answers



a



b

a


b

c

d



c



d


3 Which of these statements is true for all quadrilaterals? Tick 1 correct answer

They have 4 straight sides.

They have a line of symmetry.

They have two sides the same length.

4 Which quadrilateral is exactly the same size and shape as shape a)? Tick 1 correct answer



a

b


c

d

e




b



c



d



e



5 Which quadrilaterals have at least one right angle? Tick **2** correct answers



a



b

 a

 b

 c

 d


c



d

6 Which quadrilaterals have at least two sides the same length? Tick **2** correct answers



a



b

 a

 b

 c

 d


c



d