

Year 3 Homework - 31.01.25

L.O: To measure the volume of liquid.

Colour each jug to show the correct volume of liquid.



Example: 6l



2l



9l



5l

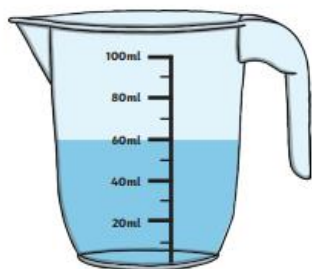


7l

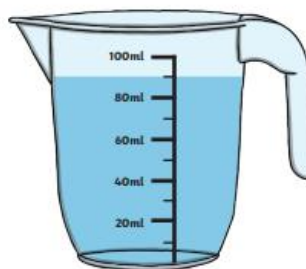


6l

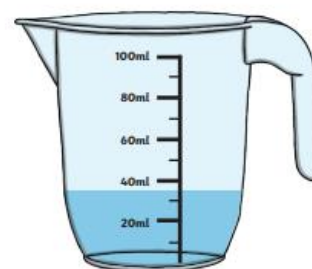
How much liquid is in each jug?



4. _____ ml



5. _____ ml



6. _____ ml

